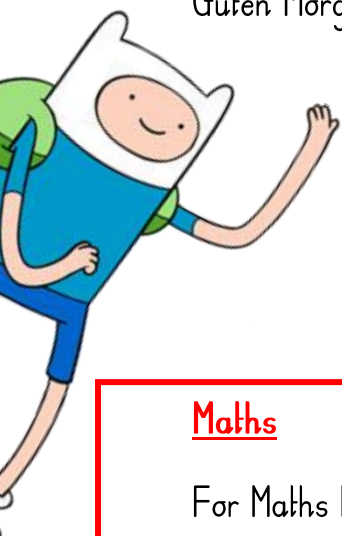




Monday 20th April 2020

Guten Morgen Klassig fünf! (Good morning Class 5!)



We hope you had a good break over the Easter holidays and enjoyed some family time. Don't forget you can leave the house once a day for exercise, check with your adult and enjoy the fresh air! Today is the first day of the Summer Term (the last term in Year 5). We both miss you and are looking forward to seeing you soon.

Maths

For Maths today you will be expanding digits to show the value of each place.

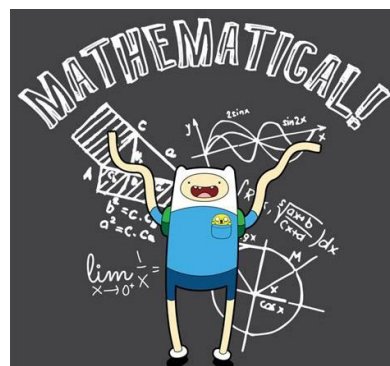
Here are some examples:

$$4532 = 4000 + 500 + 30 + 2$$

$$2.31 = 2 + 0.3 + 0.01$$

$$4.03 = 4 + 0.03$$

Choose a difficulty and complete in your blue homework book.



11	5672	2.3	200.45
23	6832	10.4	12002.03
46	8032	3.1	7.0103
82	2354	4.28	203.03
51	6032	8.99	456789
54	7002	14.34	82.4091

Don't forget you can go on Times Table Rocks Stars each day if you have access to a device.

English

For English I would like you to write a short recount of your holidays. Please email a photograph of these to year.five@blowers.dudley.sch.uk if you can as we are very interested to find out what you've been up to!



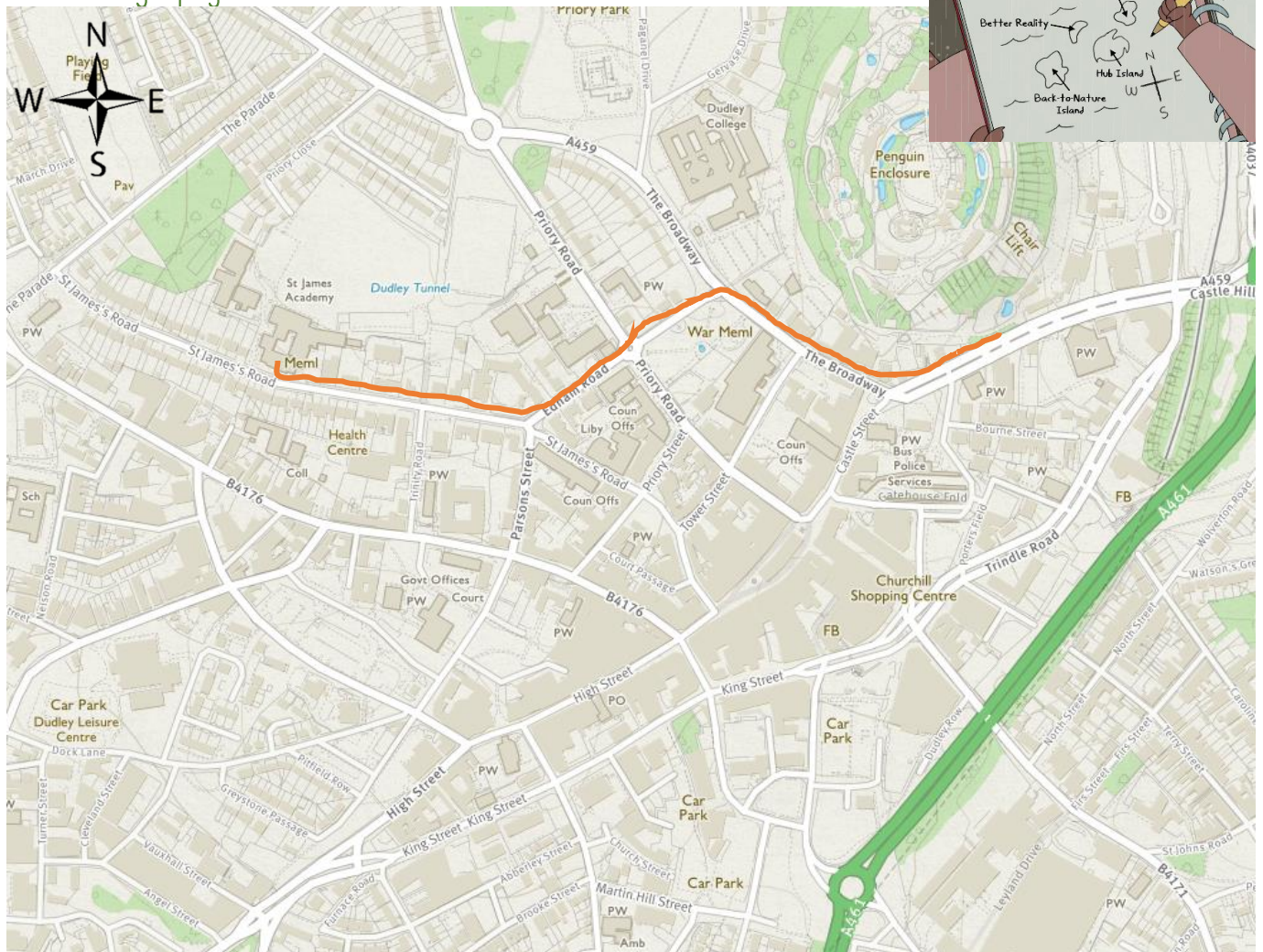
Challenge: Try to include a **relative clause**, a **time adverbial** and a **semi-colon**.

Here is an extract of Mr Brown's example:

Two weeks ago, I decided to install a new computer game to kick off the holidays. Wow! It is absolutely astonishing; it took me to another world. Time flew past much quicker than I thought possible. Uh oh! It's dark — did I really play that game all day? How embarrassing! I've decided this can't happen again and I must be more productive. "Tomorrow, I wage war against the weeds in the garden that are taking over," I thought.

The following morning I got myself ready for the day, resisted the urge to turn on my computer and gathered all the tools necessary to attack the brambles at the back of my garden. My goodness! It was like trying to wade through the undergrowth of the Amazon rainforest! My dad, **who I hadn't spoken to for a few days**, called and it was lovely to talk to him but also a great shame he couldn't help me with my garden because of social distancing!

Geography



Explore the Ordnance Survey map. This is a map of Dudley. Choose your difficulty and complete.

Look carefully at the map and make a list of different places. For example the Churchill Shopping Centre or Dudley College. Do you recognise any of these places?

Choose a place to start and a destination (a place to get to). Write directions for this journey. An example is below.

An example of directions is the trip in orange.

From St James Academy, go down St James's Road east. At the end of Ednam Road go over the Island. Turn right at the end of the road (go east). Your destination will be on the left half way down the road.

If you want to, you can explore more at <https://osmaps.ordnancesurvey.co.uk/52.51045,-2.08099,16>. Have a great day and remember you can email us at yearfive@blowers.dudley.sch.uk